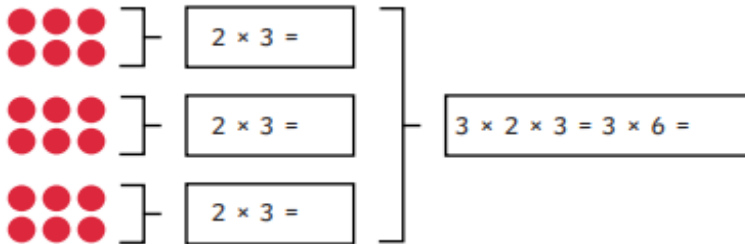


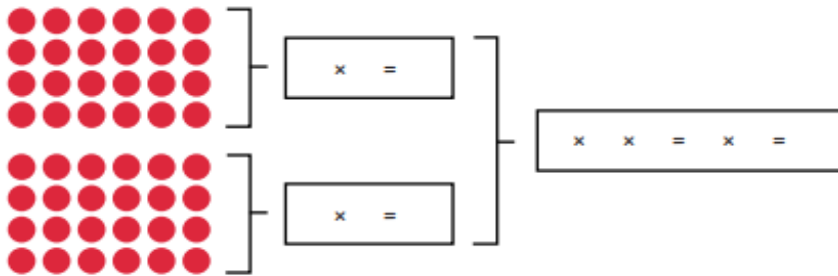
Year 4 - Extension



1) Complete the calculations to match the arrays.



$$3 \times 2 \times 3 = 3 \times 6 =$$



$$\times \times = \times =$$

2) Use your knowledge of number facts to solve the calculations.

a) $5 \times 7 \times 2 = \underline{\quad}$

b) $10 \times 3 \times 1 = \underline{\quad}$

c) $8 \times 3 \times 2 = \underline{\quad}$


d) $\underline{\quad} \times 4 \times 5 = 100$

e) $3 \times 10 \times \underline{\quad} = 180$

f) $2 \times \underline{\quad} \times 10 = 180$

3) Solve this word problem. Draw a picture and write a multiplication calculation to match it.

Amal bought 5 boxes of eggs. Each box of eggs was organised into 2 rows of 6. How many eggs did Amal have altogether?



Draw It!

Record It!